

Name _____

Date _____

Factors, Multiples, and Arrays

Quick Images: Seeing Numbers (page 1 of 2)



<p>1</p>	<p>2</p>
<p>3</p>	<p>4</p>
<p>5</p>	

Factors, Multiples, and Arrays

Quick Images: Seeing Numbers (page 2 of 2)



6

7

8

9


Name _____


Date _____


Multiple Towers and Division Stories


Quick Images: Seeing Numbers (page 1 of 6)



1. 

2. 

3. 

4. 

Multiple Towers and Division Stories

Quick Images: Seeing Numbers (page 2 of 6)



5.

6.

7.

Multiple Towers and Division Stories

Quick Images: Seeing Numbers (page 3 of 6)



8.

A large dashed box containing 12 black dots arranged in a 3x4 grid. The dots are positioned at regular intervals in three rows and four columns.

9.

A dashed box containing 12 black dots arranged in a 4x3 grid. The dots are positioned at regular intervals in four rows and three columns.




10.

A dashed box containing 16 black dots arranged in a 4x4 grid. The dots are positioned at regular intervals in four rows and four columns.


Quick Images: Seeing Numbers (page 4 of 6)



11.



12.



Quick Images: Seeing Numbers (page 5 of 6)



13.

14.

15.

Quick Images: Seeing Numbers (page 6 of 6)



16.

17.

18.