

INTERVIEW 1 TASK 2

$$3 + 6 = \square$$

INTERVIEW 1 TASK 3

$$9 + 7 = \square$$

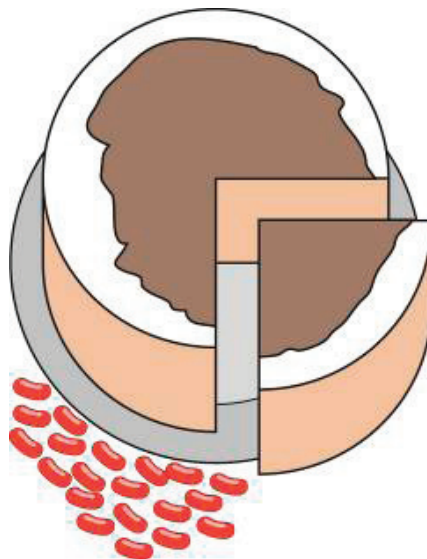
INTERVIEW 1 TASK 4



How many cups are in each row?
How many rows are there?
How many cups are there altogether?

INTERVIEW 1 TASK 5

You have 20 jellybeans.
Each quarter of the cake should have the same number of jellybeans on it.



How many jellybeans go on each quarter of the cake?

INTERVIEW 1 TASK 6

**Tamati had 57 model dinosaurs.
He gives 25 to his cousin Alice.**



How many is he left with?

INTERVIEW 1 TASK 7

**Malcolm has 24 pegs.
He uses 2 pegs to hang out each piece of clothing.**



How many pieces of clothing can he hang out?

INTERVIEW 1 TASK 8

Alex ate 12 slices of pizza.

Each slice was one-quarter ($\frac{1}{4}$) of a pizza.



How much pizza did he eat?

INTERVIEW 1 TASK 9

Jodie had some pens.


She was given another 26 pens and she now has 86 in total.



How many pens did she have in the beginning?

INTERVIEW 1 TASK 10

**Zac has 8 packs of drink.
Each pack has 6 cans.**



How many cans is that altogether?

INTERVIEW 1 TASK 11

Ruka picks 6 punnets of raspberries in 18 minutes.



How long does Ruka take to pick 3 punnets?

INTERVIEW 1 TASK 12

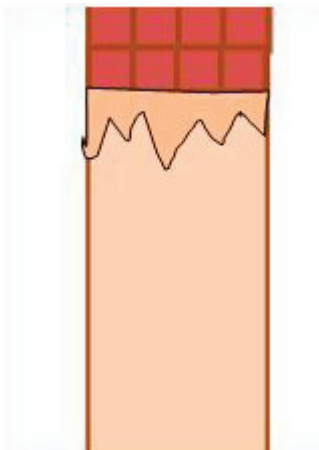


**Tana got an ipod with some songs on it.
He downloaded another 148 songs and he now has 176 songs in total.**

How many songs were on his ipod when he first got it?

INTERVIEW 1 TASK 13


There are 40 small squares in the chocolate block.



How many rows are hidden under the wrapping?

INTERVIEW 1 TASK 14

Hanni uses 32 carrots to fill 4 bags.



How many carrots does he need to fill 12 bags?

INTERVIEW 1 TASK 15

**Kathie ran 4.3 kilometres on the first day.
She ran 5.15 kilometres on the second day.**



What was the total amount of kilometres Kathie ran?

INTERVIEW 1 TASK 16

**There are 33 cartons.
Each carton holds 12 bottles of lemonade.**



How many bottles are there altogether?

INTERVIEW 1 TASK 17

**There are 20 children who go to a country school.
Three-fifths ($\frac{3}{5}$) of them travel to school by bus.**



How many children travel to school by bus?

INTERVIEW 1 TASK 18


**In 1912 the world record time for the 100 metre sprint was 10.6 seconds.
It is now 9.69 seconds.**



By how much has the record changed?

INTERVIEW 1 TASK 19

Bas needs to buy 114 cans of soft drink.



How many 6-packs should he get?

INTERVIEW 1 TASK 20

Three boys share two pizzas equally.



Eight girls share six pizzas equally.



Who gets more pizza, one of the boys or one of the girls?

INTERVIEW 1 TASK 21

**The hairdresser has 4.5 litres of dye left.
Each tint uses 0.375 litres of dye.**



How many tints can the hairdresser do?

INTERVIEW 1 TASK 22

Jacinda gets 32 of her 40 shots in.



What percentage of her shots does she get in?